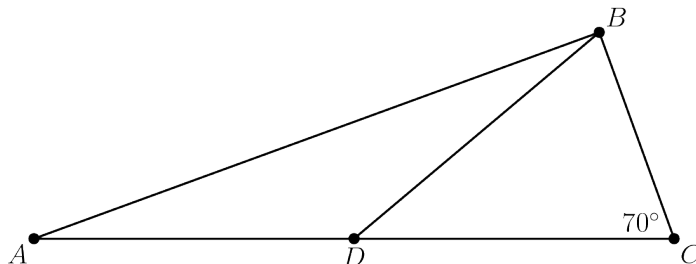


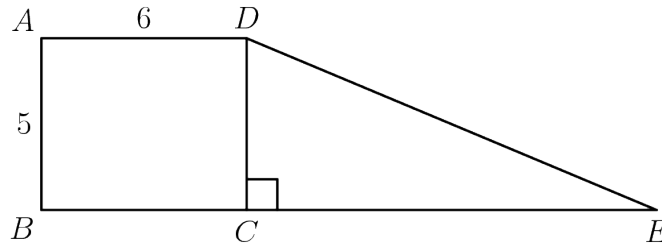
1. Harry and Terry are each told to calculate $8 - (2 + 5)$. Harry gets the correct answer. Terry ignores the parentheses and calculates $8 - 2 + 5$. If Harry's answer is H and Terry's answer is T , what is $H - T$?
2. Paul owes Paula 35 cents and has a pocket full of 5-cent coins, 10-cent coins, and 25-cent coins that he can use to pay her. What is the difference between the largest and the smallest number of coins he can use to pay her?
3. Isabella had a week to read a book for a school assignment. She read an average of 36 pages per day for the first three days and an average of 44 pages per day for the next three days. She then finished the book by reading 10 pages on the last day. How many pages were in the book?
4. The sum of two prime numbers is 85. What is the product of these two prime numbers?
5. Margie's car can go 32 miles on a gallon of gas, and gas currently costs \$4 per gallon. How many miles can Margie drive on \$20?
6. Six rectangles each with a common base width of 2 have lengths of 1, 4, 9, 16, 25, and 36. What is the sum of the areas of the six rectangles?
7. There are four more girls than boys in Ms. Raub's class of 28 students. What is the ratio of number of girls to the number of boys in her class?
8. Eleven members of the Middle School Math Club each paid the same integer amount for a guest speaker to talk about problem solving at their math club meeting. In all, they paid their guest speaker $\$1A2$. What is the missing digit A of this 3-digit number?

9. In $\triangle ABC$, D is a point on side \overline{AC} such that $BD = DC$ and $\angle BCD$ measures 70° . What is the degree measure of $\angle ADB$?

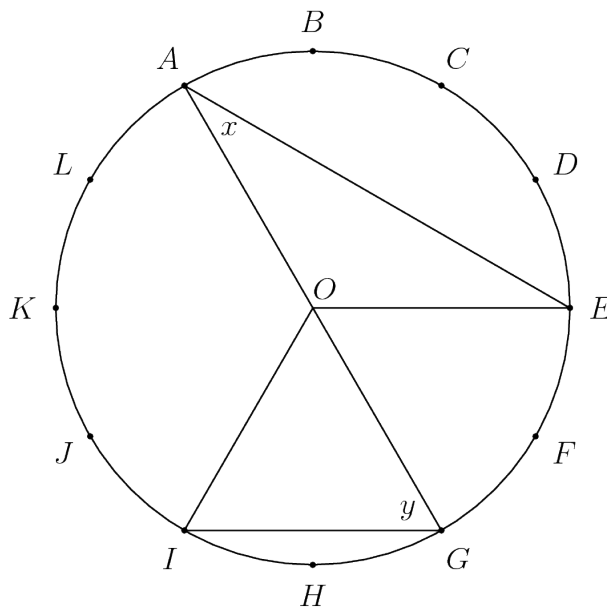


10. The first AMC 8 was given in 1985 and it has been given annually since that time. Samantha turned 12 years old the year that she took the seventh AMC 8. In what year was Samantha born?
11. Jack wants to bike from his house to Jill's house, which is located three blocks east and two blocks north of Jack's house. After biking each block, Jack can continue either east or north, but he needs to avoid a dangerous intersection one block east and one block north of his house. In how many ways can he reach Jill's house by biking a total of five blocks?
12. A magazine printed photos of three celebrities along with three photos of the celebrities as babies. The baby pictures did not identify the celebrities. Readers were asked to match each celebrity with the correct baby pictures. What is the probability that a reader guessing at random will match all three correctly as a fraction?
13. If n and m are integers and $n^2 + m^2$ is even, which of the following is impossible?
- (A) n and m are even (B) n and m are odd (C) $n + m$ is even
(D) $n + m$ is odd (E) none of these are impossible

14. Rectangle $ABCD$ and right triangle DCE have the same area. They are joined to form a trapezoid, as shown. What is DE ?

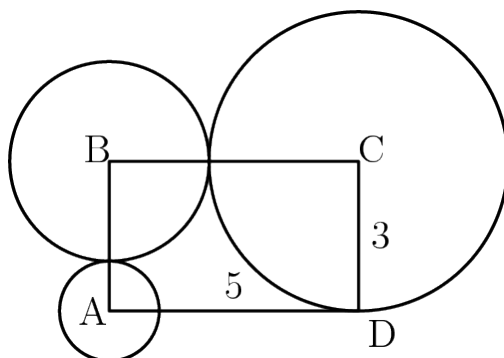


15. The circumference of the circle with center O is divided into 12 equal arcs, marked the letters A through L as seen below. What is the number of degrees in the sum of the angles x and y ?



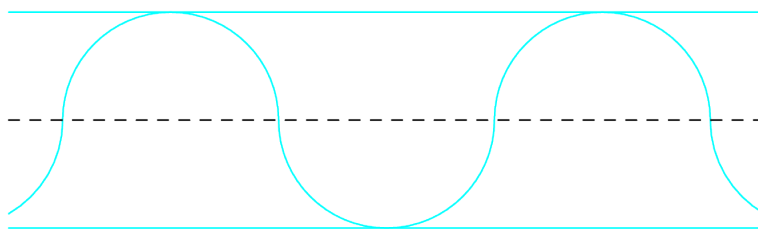
-
16. The "Middle School Eight" basketball conference has 8 teams. Every season, each team plays every other conference team twice (home and away), and each team also plays 4 games against non-conference opponents. What is the total number of games in a season involving the "Middle School Eight" teams?
17. George walks 1 mile to school. He leaves home at the same time each day, walks at a steady speed of 3 miles per hour, and arrives just as school begins. Today he was distracted by the pleasant weather and walked the first $\frac{1}{2}$ mile at a speed of only 2 miles per hour. At how many miles per hour must George run the last $\frac{1}{2}$ mile in order to arrive just as school begins today?
18. Four children were born at City Hospital yesterday. Assume each child is equally likely to be a boy or a girl. Which of the following outcomes is most likely?
- (A) all 4 are boys (B) all 4 are girls (C) 2 are girls and 2 are boys
(D) 3 are of one gender and 1 is of the other gender (E) all of these outcomes are equally likely
19. A cube with 3-inch edges is to be constructed from 27 smaller cubes with 1-inch edges. Twenty-one of the cubes are colored red and 6 are colored white. If the 3-inch cube is constructed to have the smallest possible white surface area showing, what fraction of the surface area is white?
20. The 7-digit numbers $\underline{74A52B1}$ and $\underline{326AB4C}$ are each multiples of 3. What is the sum of the possible values of C ?
21. A 2-digit number is such that the product of the digits plus the sum of the digits is equal to the number. What is the units digit of the number?

22. Rectangle $ABCD$ has sides $CD = 3$ and $DA = 5$. A circle with a radius of 1 is centered at A , a circle with a radius of 2 is centered at B , and a circle with a radius of 3 is centered at C . Which of the following is closest to the area of the region inside the rectangle but outside all three circles?



23. Three members of the Euclid Middle School girls' softball team had the following conversation.
- Ashley: I just realized that our uniform numbers are all 2-digit primes.
- Bethany: And the sum of your two uniform numbers is the date of my birthday earlier this month.
- Caitlin: That's funny. The sum of your two uniform numbers is the date of my birthday later this month.
- Ashley: And the sum of your two uniform numbers is today's date.
- What number does Caitlin wear?
24. One day the Beverage Barn sold 252 cans of soda to 100 customers, and every customer bought at least one can of soda. What is the maximum possible median number of cans of soda bought per customer on that day?

25. A straight one-mile stretch of highway, 40 feet wide, is closed. Robert rides his bike on a path composed of semicircles as shown. If he rides at 5 miles per hour, how many hours will it take to cover the one-mile stretch?



26. What is $10 \cdot \left(\frac{1}{2} + \frac{1}{5} + \frac{1}{10}\right)^{-1}$?
27. Roy's cat eats $\frac{1}{3}$ of a can of cat food every morning and $\frac{1}{4}$ of a can of cat food every evening. Before feeding his cat on Monday morning, Roy opened a box containing 6 cans of cat food. On what day of the week did the cat finish eating all the cat food in the box?
28. Bridget bakes 48 loaves of bread for her bakery. She sells half of them in the morning for \$2.50 each. In the afternoon she sells two thirds of what she has left, and because they are not fresh, she charges only half price. In the late afternoon she sells the remaining loaves at a dollar each. Each loaf costs \$0.75 for her to make. In dollars, what is her profit for the day?
29. Walking down Jane Street, Ralph passed four houses in a row, each painted a different color. He passed the orange house before the red house, and he passed the blue house before the yellow house. The blue house was not next to the yellow house. How many orderings of the colored houses are possible?

30. On an algebra quiz, 10% of the students scored 70 points, 35% scored 80 points, 30% scored 90 points, and the rest scored 100 points. What is the difference between the mean and median score of the students' scores on this quiz?
31. Suppose that a cows give b gallons of milk in c days. At this rate, how many gallons of milk will d cows give in e days?
32. The two legs of a right triangle, which are altitudes, have lengths $2\sqrt{3}$ and 6. How long is the third altitude of the triangle?
33. Five positive consecutive integers starting with a have average b . In terms of a , what is the average of 5 consecutive integers that start with b ?
34. Leah has 13 coins, all of which are pennies and nickels. If she had one more nickel than she has now, then she would have the same number of pennies and nickels. In cents, how much are Leah's coins worth?
35. What is $\frac{2^3+2^3}{2^{-3}+2^{-3}}$?
36. Peter drove the first third of his trip on a gravel road, the next 20 miles on pavement, and the remaining one-fifth on a dirt road. In miles how long was Peter's trip?

37. The diagram shows an 8 by 8 board. An ant visits each of the 64 squares once and only once. It crawls from one to another of two squares sharing at least one corner. The order in which the squares are visited is marked with numbers, starting from 1 and ending at 64. Some of the marked numbers have been erased. Restore these erased numbers.

| | | | | | | | |
|----|----|----|----|----|----|----|----|
| | 5 | | | | 26 | 25 | |
| | | 10 | 29 | | | 23 | |
| 2 | | | | 31 | | 37 | |
| 1 | 12 | | 19 | 21 | | 38 | 34 |
| 13 | | | 17 | 49 | | 33 | |
| 59 | | 16 | | 50 | 47 | 40 | |
| | | 64 | | | 46 | | 42 |
| | | 55 | | 53 | 52 | 45 | 43 |